

Algebra I  
7.8 Warm-Up  
Graphing Lines Review

Name: \_\_\_\_\_

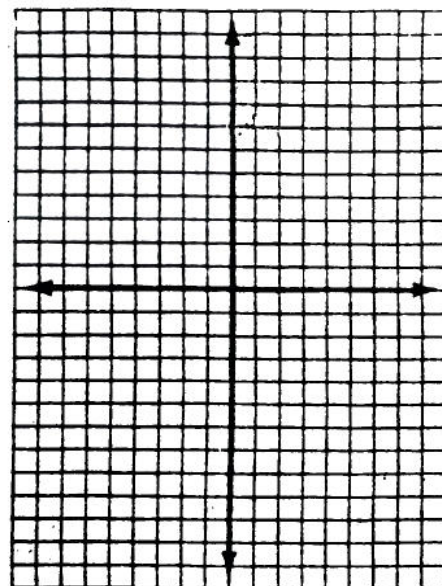


Date: \_\_\_\_\_ Hour: \_\_\_\_\_

1.  $x - y = -9$

2.  $y = -\frac{3}{4}x - 4$

3.  $y = -\frac{4}{5}x$

$\frac{x}{y}$   
0  
0



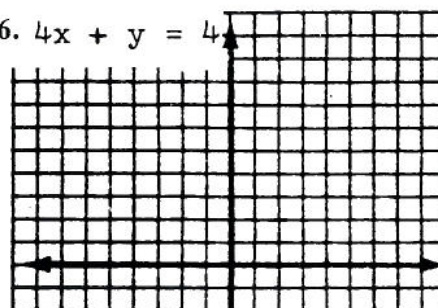
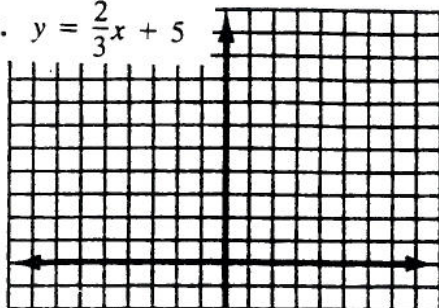
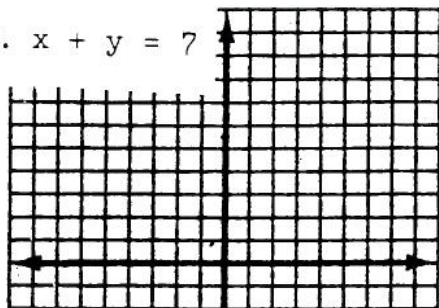
over

4.  $x + y = 7$

5.  $y = \frac{2}{3}x + 5$

6.  $4x + y = 4$

$\frac{x}{y}$   
0  
0

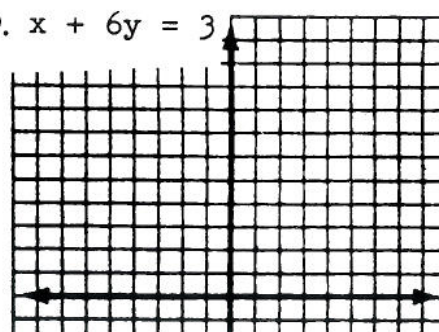
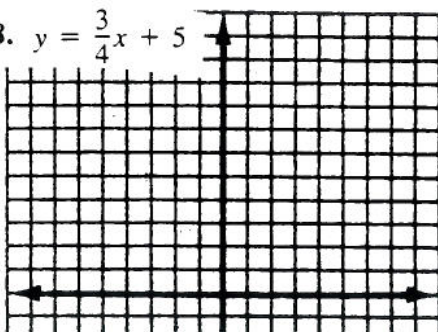
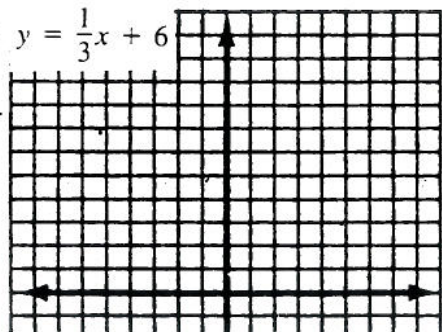


$\frac{x}{y}$   
0  
0

7.  $y = \frac{1}{3}x + 6$

8.  $y = \frac{3}{4}x + 5$

9.  $x + 6y = 3$



$\frac{x}{y}$   
0  
0